


Spring



1. Farmer Tom has 6 piglets, 4 puppies and 3 lambs.
How many animals altogether were born on the farm?




twinkl.com

Spring



2. Farmer Jakub has 3 lambs, 2 calves and 7 kittens.
How many animals were born on the farm?




twinkl.com

Spring



3. Farmer Jane had 12 piglets. On Monday, she sold 3.
How many piglets are left on the farm?




twinkl.com

Spring



4. Farmer Inca had 12 piglets. On Monday she sold 6 piglets. On Tuesday 12 more piglets were born on her Farm.

How many piglets did Inca have on Tuesday?



twinkl.com

Spring



5. There are 10 flowers in the garden. A very hungry lamb has eaten 6 flowers.

How many flowers are left in the garden?




twinkl.com

Spring



6. A brown hen has 5 chicks. A white hen has 7 chicks.

How many chicks are there?



twinkl.com


Spring



7. There are 24 chickens on Farmer Kareem's farm.

How many groups of chickens are in:

- Groups of 4?
- Groups of 3?
- Groups of 6?



twinkl.com

Spring



8. There are 32 chickens on Farmer Mei's farm.

How many groups of chickens are in:

- Groups of 2?
- Groups of 8?

What happens if Farmer Kareem puts them into groups of 16?

What happens if Farmer Mei puts them into groups of 4?



twinkl.com

Spring



9. Ola is a farmer. On Monday, 6 lambs were born on her farm. On Tuesday, 6 kittens were born on her farm. On Wednesday, 1 calf and 2 more lambs were born on her farm. On Thursday, 12 chicks hatched and 5 rabbits were born.

How many animals were born on Ola's farm?

How many lambs has Ola altogether?

How many more lambs were born on Monday than on Wednesday?

Which sort of animals does Ola have the most of?



twinkl.com

Spring



10. Farmer Sayid has very naughty kittens. They like to hide everywhere on the farm. Sayid found 2 kittens in the kitchen, 5 kittens in the bathroom, 4 kittens in the barn, 3 kittens in the stable and 2 kittens in the garden.

How many kittens has Sayid altogether?



twinkl.com

Spring



11. Daisy, Chewy and Lollie are kittens. One has white fur, one has red fur and one has grey fur. Daisy does not have red fur. Only the boy has dark fur.

Create a table for your answers. Discuss your answers with your task partner.



twinkl.com

Spring



12. Farmer Zofia found 5 eggs.



- First she found a yellow egg.
- An egg with blue stripes was between an egg with red spots and an egg with green zigzags.
- An egg with red spots was found after the yellow egg.
- A pink egg was found after an egg with green zigzags.

Put eggs in the order farmer Zofia found them. Discuss your ideas with your partner.



twinkl.com

Spring



13. Farmer John and Farmer Sara have the same number of lambs. John took his lambs and put them in groups of 3 in his barn. Sara took her lambs to the field and grouped them in groups of 5.

How many lambs could each farmer have?



twinkl.com




Spring



14. On Monday, Mateo bought plants for his garden.

On Tuesday, he planted half of them in the garden. He put in 10 bean plants, 14 tomato plants and 20 strawberry plants.

How many plants did Mateo buy in total?



twinkl.com

Spring



15. Ruth is sowing seeds in narrow rows that she dug. She sows 20 carrot seeds in each of the first 3 rows and 10 onion seeds in each of the 2 rows at the back of her garden.

How many carrot seeds is Ruth sowing?

How many onion seeds is Ruth sowing?



twinkl.com

Spring



16. Jakub has seven fields. He put a flock of sheep on each field. He has 56 sheep altogether. There is the same number of sheep on each field.

How many sheep did Jakub put on each field?



twinkl.com

Spring



17. Tom has 12 trays with seeds in his greenhouse. He grows 8 seeds in each tray.

He has 3 trays with daisies. He has 5 trays with poppies.
He has 4 trays with sweet peas.

How many daisy seedlings does Tom have?

How many poppy seedlings does Tom have?

How many sweet pea seedlings does Tom have?

How many seedlings altogether?



twinkl.com

Spring



18. Farmer Jane found 10 eggs.



- First she found a yellow egg.
- An egg with blue stripes was between an egg with red spots and an egg with green zigzags.
- An egg with red spots was found after the yellow egg.
- An egg with orange stripes was found after the green egg with zigzags.
- A purple egg was found before brown egg and after an egg with green spots.
- An egg with green spots was found before purple egg.
- A brown egg was found after a purple one.

Put the eggs in the order Farmer Jane found them. Discuss your ideas with your partner.

twinkl.com